

Computer Fundamentals: Pradeep K. Sinha & Priti Sinha

Learning Objectives

In this chapter you will learn about:

- § Boolean algebra
- § Fundamental concepts and basic laws of Boolean algebra
- § Boolean function and minimization
- § Logic gates
- § Logic circuits and Boolean expressions
- § Combinational circuits and design

Ref. Page 60 Chapter 6: Boolean Algebra and Logic Circuits Slide 2/78

Computer Fundamentals: Pradeep K. Sinha & Priti Sinha

Boolean Algebra

- § An algebra that deals with binary number system
- § George Boole (1815-1864), an English mathematician, developed it for:
 - § Simplifying representation
 - § Manipulation of propositional logic
- § In 1938, Claude E. Shannon proposed using Boolean algebra in design of relay switching circuits
- § Provides economical and straightforward approach
- § Used extensively in designing electronic circuits used in computers

Ref. Page 60 Chapter 6: Boolean Algebra and Logic Circuits Slide 3/78

Computer Fundamentals: Pradeep K. Sinha & Priit Sinha

Fundamental Concepts of Boolean Algebra

- § Use of Binary Digit
 - § Boolean equations can have either of two possible values, 0 and 1
- § Logical Addition
 - § Symbol '+', also known as 'OR' operator, used for logical addition. Follows law of binary addition
- § Logical Multiplication
 - § Symbol '.', also known as 'AND' operator, used for logical multiplication. Follows law of binary multiplication
- § Complementation
 - § Symbol '-', also known as 'NOT' operator, used for complementation. Follows law of binary complement

Ref. Page 61 Chapter 6: Boolean Algebra and Logic Circuits Slide 4/78

Computer Fundamentals: Pradeep K. Sinha & Priit Sinha

Operator Precedence

- § Each operator has a precedence level
- § Higher the operator's precedence level, earlier it is evaluated
- § Expression is scanned from left to right
- § First, expressions enclosed within parentheses are evaluated
- § Then, all complement (NOT) operations are performed
- § Then, all '.' (AND) operations are performed
- § Finally, all '+' (OR) operations are performed

(Continued on next slide)

Ref. Page 62 Chapter 6: Boolean Algebra and Logic Circuits Slide 5/78

Computer Fundamentals: Pradeep K. Sinha & Priit Sinha

Operator Precedence

(Continued from previous slide...)

1st 2nd 3rd

Ref. Page 62 Chapter 6: Boolean Algebra and Logic Circuits Slide 6/78

Computer Fundamentals: Pradeep K. Sinha & Priit Sinha

Postulates of Boolean Algebra

Postulate 1:

(a) $A = 0$, if and only if, A is not equal to 1

(b) $A = 1$, if and only if, A is not equal to 0

Postulate 2:

(a) $x + 0 = x$

(b) $x \cdot 1 = x$

Postulate 3: Commutative Law

(a) $x + y = y + x$

(b) $x \cdot y = y \cdot x$

(Continued on next slide)

Ref. Page 62
Chapter 6: Boolean Algebra and Logic Circuits
Slide 7/78

Computer Fundamentals: Pradeep K. Sinha & Priit Sinha

Postulates of Boolean Algebra

(Continued from previous slide...)

Postulate 4: Associative Law

(a) $x + (y + z) = (x + y) + z$

(b) $x \cdot (y \cdot z) = (x \cdot y) \cdot z$

Postulate 5: Distributive Law

(a) $x \cdot (y + z) = (x \cdot y) + (x \cdot z)$

(b) $x + (y \cdot z) = (x + y) \cdot (x + z)$

Postulate 6:

(a) $x + \bar{x} = 1$

(b) $x \cdot \bar{x} = 0$

Ref. Page 62
Chapter 6: Boolean Algebra and Logic Circuits
Slide 8/78

Computer Fundamentals: Pradeep K. Sinha & Priit Sinha

The Principle of Duality

There is a precise duality between the operators \cdot (AND) and $+$ (OR), and the digits 0 and 1.

For example, in the table below, the second row is obtained from the first row and vice versa simply by interchanging '+' with ' \cdot ' and '0' with '1'

	Column 1	Column 2	Column 3
Row 1	$1 + 1 = 1$	$1 + 0 = 0 + 1 = 1$	$0 + 0 = 0$
Row 2	$0 \cdot 0 = 0$	$0 \cdot 1 = 1 \cdot 0 = 0$	$1 \cdot 1 = 1$

Therefore, if a particular theorem is proved, its dual theorem automatically holds and need not be proved separately

Ref. Page 63
Chapter 6: Boolean Algebra and Logic Circuits
Slide 9/78

Computer Fundamentals: Pradeep K. Sinha & Priit Sinha

Some Important Theorems of Boolean Algebra

Sr. No.	Theorems/ Identities	Dual Theorems/ Identities	Name (if any)
1	$x + x = x$	$x \cdot x = x$	Idempotent Law
2	$x + 1 = 1$	$x \cdot 0 = 0$	
3	$x + x \cdot y = x$	$x \cdot x + y = x$	Absorption Law
4	$\overline{\overline{x}} = x$		Involution Law
5	$x \cdot \overline{x} + y = x \cdot y$	$x + \overline{x} \cdot y = x + y$	
6	$\overline{x+y} = \overline{x} \cdot \overline{y}$	$\overline{x \cdot y} = \overline{x} + \overline{y}$	De Morgan's Law

Ref. Page 63 Chapter 6: Boolean Algebra and Logic Circuits Slide 10/78

Computer Fundamentals: Pradeep K. Sinha & Priit Sinha

Methods of Proving Theorems

The theorems of Boolean algebra may be proved by using one of the following methods:

1. By using postulates to show that L.H.S. = R.H.S
2. By *Perfect Induction* or *Exhaustive Enumeration* method where all possible combinations of variables involved in L.H.S. and R.H.S. are checked to yield identical results
3. By the *Principle of Duality* where the dual of an already proved theorem is derived from the proof of its corresponding pair

Ref. Page 63 Chapter 6: Boolean Algebra and Logic Circuits Slide 11/78

Computer Fundamentals: Pradeep K. Sinha & Priit Sinha

Proving a Theorem by Using Postulates (Example)

Theorem:

$$x + x \cdot y = x$$

Proof:

L.H.S.

$$\begin{aligned}
 &= x + x \cdot y \\
 &= x \cdot 1 + x \cdot y && \text{by postulate 2(b)} \\
 &= x \cdot (1 + y) && \text{by postulate 5(a)} \\
 &= x \cdot (y + 1) && \text{by postulate 3(a)} \\
 &= x \cdot 1 && \text{by theorem 2(a)} \\
 &= x && \text{by postulate 2(b)} \\
 &= \text{R.H.S.}
 \end{aligned}$$

Ref. Page 64 Chapter 6: Boolean Algebra and Logic Circuits Slide 12/78

Computer Fundamentals: Pradeep K. Sinha & Priit Sinha

Proving a Theorem by Perfect Induction (Example)

Theorem:

$$x + x \cdot y = x$$

x	y	$x \cdot y$	$x + x \cdot y$
0	0	0	0
0	1	0	0
1	0	0	1
1	1	1	1

Ref. Page 64Chapter 6: Boolean Algebra and Logic CircuitsSlide 12/78

Computer Fundamentals: Pradeep K. Sinha & Priit Sinha

Proving a Theorem by the Principle of Duality (Example)

Theorem:

$$x + x = x$$

Proof:

L.H.S.	
$= x + x$	
$= (x + x) \cdot 1$	by postulate 2(b)
$= (x + x) \cdot (x + \bar{x})$	by postulate 6(a)
$= x + x \cdot \bar{x}$	by postulate 5(b)
$= x + 0$	by postulate 6(b)
$= x$	by postulate 2(a)
$= \text{R.H.S.}$	

(Continued on next slide)

Ref. Page 63Chapter 6: Boolean Algebra and Logic CircuitsSlide 14/78

Computer Fundamentals: Pradeep K. Sinha & Priit Sinha

Proving a Theorem by the Principle of Duality (Example)

(Continued from previous slide...)

Dual Theorem:

$$x \cdot x = x$$

Proof:

L.H.S.		
$= x \cdot x$		
$= x \cdot x + 0$	by postulate 2(a)	Notice that each step of the proof of the dual theorem is derived from the proof of its corresponding pair in the original theorem
$= x \cdot x + x \cdot \bar{x}$	by postulate 6(b)	
$= x \cdot (x + \bar{x})$	by postulate 5(a)	
$= x \cdot 1$	by postulate 6(a)	
$= x$	by postulate 2(b)	
$= \text{R.H.S.}$		

Ref. Page 63Chapter 6: Boolean Algebra and Logic CircuitsSlide 15/78

Computer Fundamentals: Pradeep K. Sinha & Priit Sinha

Boolean Functions

- § A Boolean function is an expression formed with:
 - § Binary variables
 - § Operators (OR, AND, and NOT)
 - § Parentheses, and equal sign
- § The value of a Boolean function can be either 0 or 1
- § A Boolean function may be represented as:
 - § An algebraic expression, or
 - § A truth table

Ref. Page 67
Chapter 6: Boolean Algebra and Logic Circuits
Slide 14/78

Computer Fundamentals: Pradeep K. Sinha & Priit Sinha

Representation as an Algebraic Expression

$$W = X + \bar{Y} \cdot Z$$

- § Variable W is a function of X, Y, and Z, can also be written as $W = f(X, Y, Z)$
- § The RHS of the equation is called an *expression*
- § The symbols X, Y, Z are the *literals* of the function
- § For a given Boolean function, there may be more than one algebraic expressions

Ref. Page 67
Chapter 6: Boolean Algebra and Logic Circuits
Slide 17/78

Computer Fundamentals: Pradeep K. Sinha & Priit Sinha

Representation as a Truth Table

X	Y	Z	W
0	0	0	0
0	0	1	1
0	1	0	0
0	1	1	0
1	0	0	1
1	0	1	1
1	1	0	1
1	1	1	1

(Continued on next slide)

Ref. Page 67
Chapter 6: Boolean Algebra and Logic Circuits
Slide 18/78

Computer Fundamentals: Pradeep K. Sinha & Priit Sinha

Representation as a Truth Table

(Continued from previous slide...)

- § The number of rows in the table is equal to 2^n , where n is the number of literals in the function
- § The combinations of 0s and 1s for rows of this table are obtained from the binary numbers by counting from 0 to $2^n - 1$

Ref. Page 67 Chapter 6: Boolean Algebra and Logic Circuits Slide 19/78

Computer Fundamentals: Pradeep K. Sinha & Priit Sinha

Minimization of Boolean Functions

- § Minimization of Boolean functions deals with
 - § Reduction in number of literals
 - § Reduction in number of terms
- § Minimization is achieved through manipulating expression to obtain equal and simpler expression(s) (having fewer literals and/or terms)

(Continued on next slide)

Ref. Page 68 Chapter 6: Boolean Algebra and Logic Circuits Slide 20/78

Computer Fundamentals: Pradeep K. Sinha & Priit Sinha

Minimization of Boolean Functions

(Continued from previous slide...)

$$F_1 = \bar{x} \cdot \bar{y} \cdot z + \bar{x} \cdot y \cdot z + x \cdot \bar{y}$$

F_1 has 3 literals (x, y, z) and 3 terms

$$F_2 = x \cdot \bar{y} + \bar{x} \cdot z$$

F_2 has 3 literals (x, y, z) and 2 terms

F_2 can be realized with fewer electronic components, resulting in a cheaper circuit

(Continued on next slide)

Ref. Page 68 Chapter 6: Boolean Algebra and Logic Circuits Slide 21/78

Computer Fundamentals: Pradeep K. Sinha & Priit Sinha

Minimization of Boolean Functions

(Continued from previous slide...)

x	y	z	F ₁	F ₂
0	0	0	0	0
0	0	1	1	1
0	1	0	0	0
0	1	1	1	1
1	0	0	1	1
1	0	1	1	1
1	1	0	0	0
1	1	1	0	0

Both F₁ and F₂ produce the same result

Ref. Page 68 Chapter 6: Boolean Algebra and Logic Circuits Slide 22/78

Computer Fundamentals: Pradeep K. Sinha & Priit Sinha

Try out some Boolean Function Minimization

(a) $x + \bar{x} \cdot y$

(b) $x \cdot (\bar{x} + y)$

(c) $\bar{x} \cdot \bar{y} \cdot z + \bar{x} \cdot y \cdot z + x \cdot \bar{y}$

(d) $x \cdot y + \bar{x} \cdot z + y \cdot z$

(e) $(x + y) \cdot (\bar{x} + z) \cdot (y + z)$

Ref. Page 69 Chapter 6: Boolean Algebra and Logic Circuits Slide 23/78

Computer Fundamentals: Pradeep K. Sinha & Priit Sinha

Complement of a Boolean Function

§ The complement of a Boolean function is obtained by interchanging:

- § Operators OR and AND
- § Complementing each literal

§ This is based on *De Morgan's theorems*, whose general form is:

$$\overline{A_1 + A_2 + A_3 + \dots + A_n} = \bar{A}_1 \cdot \bar{A}_2 \cdot \bar{A}_3 \cdot \dots \cdot \bar{A}_n$$

$$\overline{\bar{A}_1 \cdot \bar{A}_2 \cdot \bar{A}_3 \cdot \dots \cdot \bar{A}_n} = A_1 + A_2 + A_3 + \dots + A_n$$

Ref. Page 70 Chapter 6: Boolean Algebra and Logic Circuits Slide 24/78

Computer Fundamentals: Pradeep K. Sinha & Priit Sinha

Complementing a Boolean Function (Example)

$F_1 = \bar{x} \cdot y \cdot \bar{z} + \bar{x} \cdot \bar{y} \cdot z$

To obtain \bar{F}_1 , we first interchange the OR and the AND operators giving

$$(\bar{x} + y + \bar{z}) \cdot (\bar{x} + \bar{y} + z)$$

Now we complement each literal giving

$$\bar{F}_1 = (x + \bar{y} + z) \cdot (x + y + \bar{z})$$

Ref. Page 71 Chapter 6: Boolean Algebra and Logic Circuits Slide 25/78

Computer Fundamentals: Pradeep K. Sinha & Priit Sinha

Canonical Forms of Boolean Functions

Minterms : n variables forming an AND term, with each variable being primed or unprimed, provide 2^n possible combinations called *minterms* or *standard products*

Maxterms : n variables forming an OR term, with each variable being primed or unprimed, provide 2^n possible combinations called *maxterms* or *standard sums*

Ref. Page 71 Chapter 6: Boolean Algebra and Logic Circuits Slide 26/78

Computer Fundamentals: Pradeep K. Sinha & Priit Sinha

Minterms and Maxterms for three Variables

Variables			Minterms		Maxterms	
x	y	z	Term	Designation	Term	Designation
0	0	0	$\bar{x} \cdot \bar{y} \cdot \bar{z}$	m_0	$x + y + z$	M_0
0	0	1	$\bar{x} \cdot \bar{y} \cdot z$	m_1	$x + y + \bar{z}$	M_1
0	1	0	$\bar{x} \cdot y \cdot \bar{z}$	m_2	$x + \bar{y} + z$	M_2
0	1	1	$\bar{x} \cdot y \cdot z$	m_3	$x + \bar{y} + \bar{z}$	M_3
1	0	0	$x \cdot \bar{y} \cdot \bar{z}$	m_4	$\bar{x} + y + z$	M_4
1	0	1	$x \cdot \bar{y} \cdot z$	m_5	$\bar{x} + y + \bar{z}$	M_5
1	1	0	$x \cdot y \cdot \bar{z}$	m_6	$\bar{x} + \bar{y} + z$	M_6
1	1	1	$x \cdot y \cdot z$	m_7	$\bar{x} + \bar{y} + \bar{z}$	M_7

Note that each minterm is the complement of its corresponding maxterm and vice-versa

Ref. Page 71 Chapter 6: Boolean Algebra and Logic Circuits Slide 27/78

Computer Fundamentals: Pradeep K. Sinha & Priit Sinha

Sum-of-Products (SOP) Expression

A sum-of-products (SOP) expression is a product term (minterm) or several product terms (minterms) logically added (ORed) together. Examples are:

$$\begin{array}{ll}
 x & x+y \\
 x+y \cdot z & x \cdot y + z \\
 x \cdot \bar{y} + \bar{x} \cdot y & \bar{x} \cdot \bar{y} + x \cdot \bar{y} \cdot z
 \end{array}$$

Ref. Page 72 Chapter 6: Boolean Algebra and Logic Circuits Slide 28/78

Computer Fundamentals: Pradeep K. Sinha & Priit Sinha

Steps to Express a Boolean Function in its Sum-of-Products Form

1. Construct a truth table for the given Boolean function
2. Form a minterm for each combination of the variables, which produces a 1 in the function
3. The desired expression is the sum (OR) of all the minterms obtained in Step 2

Ref. Page 72 Chapter 6: Boolean Algebra and Logic Circuits Slide 29/78

Computer Fundamentals: Pradeep K. Sinha & Priit Sinha

Expressing a Function in its Sum-of-Products Form (Example)

x	y	z	F_1
0	0	0	0
0	0	1	1
0	1	0	0
0	1	1	0
1	0	0	1
1	0	1	0
1	1	0	0
1	1	1	1

The following 3 combinations of the variables produce a 1:
001, 100, and 111

(Continued on next slide)

Ref. Page 73 Chapter 6: Boolean Algebra and Logic Circuits Slide 30/78

Computer Fundamentals: Pradeep K. Sinha & Priit Sinha

Expressing a Function in its Sum-of-Products Form (Example)

(Continued from previous slide...)

§ Their corresponding minterms are:
 $\bar{x} \cdot \bar{y} \cdot z$, $x \cdot \bar{y} \cdot \bar{z}$, and $x \cdot y \cdot z$

§ Taking the OR of these minterms, we get

$$F_1 = \bar{x} \cdot \bar{y} \cdot z + x \cdot \bar{y} \cdot \bar{z} + x \cdot y \cdot z = m_1 + m_4 + m_7$$

$$F_1(x \cdot y \cdot z) = \Sigma(1, 4, 7)$$

Ref. Page 72 Chapter 6: Boolean Algebra and Logic Circuits Slide 31/72

Computer Fundamentals: Pradeep K. Sinha & Priit Sinha

Product-of Sums (POS) Expression

A product-of-sums (POS) expression is a sum term (maxterm) or several sum terms (maxterms) logically multiplied (ANDed) together. Examples are:

$$x \quad (x + \bar{y}) \cdot (\bar{x} + y) \cdot (\bar{x} + \bar{y})$$

$$\bar{x} + y \quad (x + y) \cdot (\bar{x} + y + z)$$

$$(\bar{x} + \bar{y}) \cdot z \quad (\bar{x} + y) \cdot (x + \bar{y})$$

Ref. Page 74 Chapter 6: Boolean Algebra and Logic Circuits Slide 32/72

Computer Fundamentals: Pradeep K. Sinha & Priit Sinha

Steps to Express a Boolean Function in its Product-of-Sums Form

1. Construct a truth table for the given Boolean function
2. Form a maxterm for each combination of the variables, which produces a 0 in the function
3. The desired expression is the product (AND) of all the maxterms obtained in Step 2

Ref. Page 74 Chapter 6: Boolean Algebra and Logic Circuits Slide 33/72

Computer Fundamentals: Pradeep K. Sinha & Priit Sinha

Expressing a Function in its Product-of-Sums Form

x	y	z	F ₁
0	0	0	0
0	0	1	1
0	1	0	0
0	1	1	0
1	0	0	1
1	0	1	0
1	1	0	0
1	1	1	1

§ The following 5 combinations of variables produce a 0:
000, 010, 011, 101, and 110

(Continued on next slide)

Ref. Page 73 Chapter 6: Boolean Algebra and Logic Circuits Slide 34/72

Computer Fundamentals: Pradeep K. Sinha & Priit Sinha

Expressing a Function in its Product-of-Sums Form

(Continued from previous slide...)

§ Their corresponding maxterms are:

$$(x+y+z), (x+\bar{y}+z), (x+\bar{y}+\bar{z}),$$

$$(\bar{x}+y+\bar{z}) \text{ and } (\bar{x}+\bar{y}+z)$$

§ Taking the AND of these maxterms, we get:

$$F_1 = (x+y+z) \cdot (x+\bar{y}+z) \cdot (x+\bar{y}+\bar{z}) \cdot (\bar{x}+y+\bar{z}) \cdot (\bar{x}+\bar{y}+z)$$

$$(\bar{x}+\bar{y}+z) = M_0 \cdot M_2 \cdot M_3 \cdot M_5 \cdot M_6$$

$$F_1(x,y,z) = \Pi(0,2,3,5,6)$$

Ref. Page 74 Chapter 6: Boolean Algebra and Logic Circuits Slide 35/72

Computer Fundamentals: Pradeep K. Sinha & Priit Sinha

Conversion Between Canonical Forms (Sum-of-Products and Product-of-Sums)

To convert from one canonical form to another, interchange the symbol and list those numbers missing from the original form.

Example:

$$F(x,y,z) = \Pi(0,2,4,5) = \Sigma(1,3,6,7)$$

$$F(x,y,z) = \Pi(1,4,7) = \Sigma(0,2,3,5,6)$$

Ref. Page 76 Chapter 6: Boolean Algebra and Logic Circuits Slide 36/72

Computer Fundamentals: Pradeep K. Sinha & Priit Sinha

Logic Gates

- § Logic gates are electronic circuits that operate on one or more input signals to produce standard output signal
- § Are the building blocks of all the circuits in a computer
- § Some of the most basic and useful logic gates are AND, OR, NOT, NAND and NOR gates

Ref. Page 77

Chapter 6: Boolean Algebra and Logic Circuits

Slide 37/78

Computer Fundamentals: Pradeep K. Sinha & Priit Sinha

AND Gate

- § Physical realization of logical multiplication (AND) operation
- § Generates an output signal of 1 only if all input signals are also 1

Ref. Page 77

Chapter 6: Boolean Algebra and Logic Circuits


Slide 38/78

Computer Fundamentals: Pradeep K. Sinha & Priit Sinha

AND Gate (Block Diagram Symbol and Truth Table)

A

B



C = A · B

Inputs		Output
A	B	C = A · B
0	0	0
0	1	0
1	0	0
1	1	1

Ref. Page 77

Chapter 6: Boolean Algebra and Logic Circuits

Slide 39/78

Computer Fundamentals: Pradeep K. Sinha & Priit Sinha

OR Gate

§ Physical realization of logical addition (OR) operation

§ Generates an output signal of 1 if at least one of the input signals is also 1

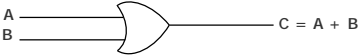
Ref. Page 77

Chapter 6: Boolean Algebra and Logic Circuits

Slide 40/78

Computer Fundamentals: Pradeep K. Sinha & Priit Sinha

OR Gate (Block Diagram Symbol and Truth Table)



Inputs		Output
A	B	$C = A + B$
0	0	0
0	1	1
1	0	1
1	1	1

Ref. Page 78

Chapter 6: Boolean Algebra and Logic Circuits

Slide 41/78

Computer Fundamentals: Pradeep K. Sinha & Priit Sinha

NOT Gate

§ Physical realization of complementation operation

§ Generates an output signal, which is the reverse of the input signal

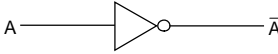
Ref. Page 78

Chapter 6: Boolean Algebra and Logic Circuits

Slide 42/78

Computer Fundamentals: Pradeep K. Sinha & Priit Sinha

NOT Gate (Block Diagram Symbol and Truth Table)



Input	Output
A	\bar{A}
0	1
1	0

Ref. Page: 79 Chapter 6: Boolean Algebra and Logic Circuits Slide 43/79

Computer Fundamentals: Pradeep K. Sinha & Priit Sinha


NAND Gate

- § Complemented AND gate
- § Generates an output signal of:
 - § 1 if any one of the inputs is a 0
 - § 0 when all the inputs are 1

Ref. Page: 79 Chapter 6: Boolean Algebra and Logic Circuits Slide 44/79

Computer Fundamentals: Pradeep K. Sinha & Priit Sinha

NAND Gate (Block Diagram Symbol and Truth Table)



Inputs		Output
A	B	$C = \bar{A \cdot B}$
0	0	1
0	1	1
1	0	1
1	1	0

Ref. Page: 79 Chapter 6: Boolean Algebra and Logic Circuits Slide 45/79

Computer Fundamentals: Pradeep K. Sinha & Priit Sinha

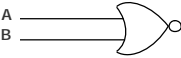
NOR Gate

- § Complemented OR gate
- § Generates an output signal of:
 - § 1 only when all inputs are 0
 - § 0 if any one of inputs is a 1

Ref. Page 79 Chapter 6: Boolean Algebra and Logic Circuits Slide 44/78

Computer Fundamentals: Pradeep K. Sinha & Priit Sinha

NOR Gate (Block Diagram Symbol and Truth Table)



$$C = A \downarrow B = \overline{A + B} = \bar{A} \cdot \bar{B}$$

Inputs		Output
A	B	$C = \bar{A} \cdot \bar{B}$
0	0	1
0	1	0
1	0	0
1	1	0

Ref. Page 80 Chapter 6: Boolean Algebra and Logic Circuits Slide 47/78

Computer Fundamentals: Pradeep K. Sinha & Priit Sinha

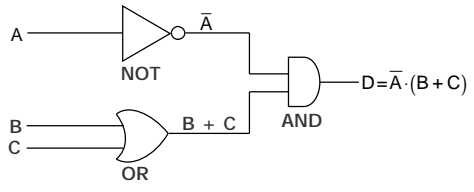
Logic Circuits

- § When logic gates are interconnected to form a gating / logic network, it is known as a *combinational logic circuit*
- § The Boolean algebra expression for a given logic circuit can be derived by systematically progressing from input to output on the gates
- § The three logic gates (AND, OR, and NOT) are logically complete because any Boolean expression can be realized as a logic circuit using only these three gates

Ref. Page 80 Chapter 6: Boolean Algebra and Logic Circuits Slide 48/78

Computer Fundamentals: Pradeep K. Sinha & Priit Sinha

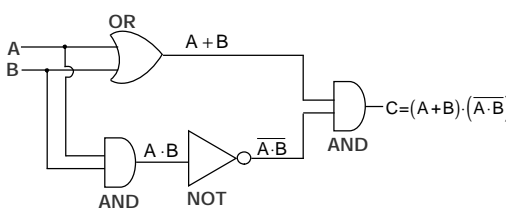
Finding Boolean Expression of a Logic Circuit (Example 1)



Ref. Page 80 Chapter 6: Boolean Algebra and Logic Circuits Slide 49/78

Computer Fundamentals: Pradeep K. Sinha & Priit Sinha

Finding Boolean Expression of a Logic Circuit (Example 2)

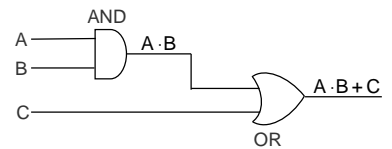


Ref. Page 81 Chapter 6: Boolean Algebra and Logic Circuits Slide 50/78

Computer Fundamentals: Pradeep K. Sinha & Priit Sinha

Constructing a Logic Circuit from a Boolean Expression (Example 1)

Boolean Expression = $A \cdot B + C$



Ref. Page 83 Chapter 6: Boolean Algebra and Logic Circuits Slide 51/78

Computer Fundamentals: Pradeep K. Sinha & Priit Sinha

Constructing a Logic Circuit from a Boolean Expression (Example 2)

Boolean Expression = $\overline{A \cdot B} + C \cdot D + \overline{E \cdot F}$

$A \cdot B + C \cdot D + \overline{E \cdot F}$

Ref. Page 83 Chapter 6: Boolean Algebra and Logic Circuits Slide 52/78

Computer Fundamentals: Pradeep K. Sinha & Priit Sinha

Universal NAND Gate

§ NAND gate is an universal gate, it is alone sufficient to implement any Boolean expression

§ To understand this, consider:

- § Basic logic gates (AND, OR, and NOT) are logically complete
- § Sufficient to show that AND, OR, and NOT gates can be implemented with NAND gates

Ref. Page 84 Chapter 6: Boolean Algebra and Logic Circuits Slide 53/78

Computer Fundamentals: Pradeep K. Sinha & Priit Sinha

Implementation of NOT, AND and OR Gates by NAND Gates

(a) NOT gate implementation.

(b) AND gate implementation.

(Continued on next slide)

Ref. Page 85 Chapter 6: Boolean Algebra and Logic Circuits Slide 54/78

Computer Fundamentals: Pradeep K. Sinha & Priit Sinha

Implementation of NOT, AND and OR Gates by NAND Gates

(Continued from previous slide...)

$A \cdot \bar{A} = \bar{A}$
 $B \cdot \bar{B} = \bar{B}$
 $\bar{A} \cdot \bar{B} = \overline{A + B} = A + B$

(c) OR gate implementation.

Ref. Page 85 Chapter 6: Boolean Algebra and Logic Circuits Slide 55/78

Computer Fundamentals: Pradeep K. Sinha & Priit Sinha

Method of Implementing a Boolean Expression with Only NAND Gates

Step 1: From the given algebraic expression, draw the logic diagram with AND, OR, and NOT gates. Assume that both the normal (A) and complement (\bar{A}) inputs are available

Step 2: Draw a second logic diagram with the equivalent NAND logic substituted for each AND, OR, and NOT gate

Step 3: Remove all pairs of cascaded inverters from the diagram as double inversion does not perform any logical function. Also remove inverters connected to single external inputs and complement the corresponding input variable

Ref. Page 85 Chapter 6: Boolean Algebra and Logic Circuits Slide 56/78

Computer Fundamentals: Pradeep K. Sinha & Priit Sinha

Implementing a Boolean Expression with Only NAND Gates (Example)

Boolean Expression = $A \cdot \bar{B} + C \cdot (A + B \cdot D)$

(a) Step 1: AND/OR implementation

(Continued on next slide)

Ref. Page 87 Chapter 6: Boolean Algebra and Logic Circuits Slide 57/78

Computer Fundamentals: Pradeep K. Sinha & Priit Sinha

Implementing a Boolean Expression with Only NAND Gates (Example)

(Continued from previous slide...)

(b) Step 2: Substituting equivalent NAND functions

(Continued on next slide)

Ref. Page 87 Chapter 6: Boolean Algebra and Logic Circuits Slide 58/78

Computer Fundamentals: Pradeep K. Sinha & Priit Sinha

Implementing a Boolean Expression with Only NAND Gates (Example)

(Continued from previous slide...)

(c) Step 3: NAND implementation.

Ref. Page 87 Chapter 6: Boolean Algebra and Logic Circuits Slide 59/78

Computer Fundamentals: Pradeep K. Sinha & Priit Sinha

Universal NOR Gate

- § NOR gate is an universal gate, it is alone sufficient to implement any Boolean expression
- § To understand this, consider:
 - § Basic logic gates (AND, OR, and NOT) are logically complete
 - § Sufficient to show that AND, OR, and NOT gates can be implemented with NOR gates

Ref. Page 89 Chapter 6: Boolean Algebra and Logic Circuits Slide 60/78

Computer Fundamentals: Pradeep K. Sinha & Priit Sinha

Implementation of NOT, OR and AND Gates by NOR Gates

(a) NOT gate implementation.

(b) OR gate implementation.

(Continued on next slide)

Ref. Page: 89 Chapter 6: Boolean Algebra and Logic Circuits Slide 6.1/78

Computer Fundamentals: Pradeep K. Sinha & Priit Sinha

Implementation of NOT, OR and AND Gates by NOR Gates

(Continued from previous slide...)

(c) AND gate implementation.

Ref. Page: 89 Chapter 6: Boolean Algebra and Logic Circuits Slide 6.2/78

Computer Fundamentals: Pradeep K. Sinha & Priit Sinha

Method of Implementing a Boolean Expression with Only NOR Gates

Step 1: For the given algebraic expression, draw the logic diagram with AND, OR, and NOT gates. Assume that both the normal (A) and complement (A-bar) inputs are available

Step 2: Draw a second logic diagram with equivalent NOR logic substituted for each AND, OR, and NOT gate

Step 3: Remove all parts of cascaded inverters from the diagram as double inversion does not perform any logical function. Also remove inverters connected to single external inputs and complement the corresponding input variable

Ref. Page: 89 Chapter 6: Boolean Algebra and Logic Circuits Slide 6.3/78

Computer Fundamentals: Pradeep K. Sinha & Priit Sinha

Implementing a Boolean Expression with Only NOR Gates (Examples)

(Continued from previous slide...)

Boolean Expression $A \cdot \bar{B} + C \cdot (A + B \cdot D)$

(a) Step 1: AND/OR implementation.

(Continued on next slide)

Ref. Page 90 Chapter 6: Boolean Algebra and Logic Circuits Slide 64/78

Computer Fundamentals: Pradeep K. Sinha & Priit Sinha

Implementing a Boolean Expression with Only NOR Gates (Examples)

(Continued from previous slide...)

(b) Step 2: Substituting equivalent NOR functions.

(Continued on next slide)

Ref. Page 90 Chapter 6: Boolean Algebra and Logic Circuits Slide 65/78

Computer Fundamentals: Pradeep K. Sinha & Priit Sinha

Implementing a Boolean Expression with Only NOR Gates (Examples)

(Continued from previous slide...)


(c) Step 3: NOR implementation.

Ref. Page 91 Chapter 6: Boolean Algebra and Logic Circuits Slide 66/78


Computer Fundamentals: Pradeep K. Sinha & Priit Sinha

Exclusive-OR Function

$$A \oplus B = A \cdot \bar{B} + \bar{A} \cdot B$$



$C = A \oplus B = \bar{A} \cdot B + A \cdot \bar{B}$



$C = A \oplus B = \bar{A} \cdot B + A \cdot \bar{B}$

Also, $(A \oplus B) \oplus C = A \oplus (B \oplus C) = A \oplus B \oplus C$

(Continued on next slide)

Ref. Page 91

Chapter 6: Boolean Algebra and Logic Circuits

Slide 67/78

Computer Fundamentals: Pradeep K. Sinha & Priit Sinha

Exclusive-OR Function (Truth Table)

(Continued from previous slide...)

Inputs		Output
A	B	$C = A \oplus B$
0	0	0
0	1	1
1	0	1
1	1	0

Ref. Page 92


Chapter 6: Boolean Algebra and Logic Circuits

Slide 68/78

Computer Fundamentals: Pradeep K. Sinha & Priit Sinha

Equivalence Function with Block Diagram Symbol

$$A \odot B = A \cdot B + \bar{A} \cdot \bar{B}$$



$C = A \odot B = A \cdot B + \bar{A} \cdot \bar{B}$

Also, $(A \odot B) \odot C = A \odot (B \odot C) = A \odot B \odot C$

(Continued on next slide)

Ref. Page 91

Chapter 6: Boolean Algebra and Logic Circuits

Slide 69/78

23

Computer Fundamentals: Pradeep K. Sinha & Priit Sinha

Equivalence Function (Truth Table)

Inputs		Output
A	B	$C = A \oplus B$
0	0	1
0	1	0
1	0	0
1	1	1

Ref. Page 92 Chapter 6: Boolean Algebra and Logic Circuits Slide 70/78

Computer Fundamentals: Pradeep K. Sinha & Priit Sinha

Steps in Designing Combinational Circuits

1. State the given problem completely and exactly
2. Interpret the problem and determine the available input variables and required output variables
3. Assign a letter symbol to each input and output variables
4. Design the truth table that defines the required relations between inputs and outputs
5. Obtain the simplified Boolean function for each output
6. Draw the logic circuit diagram to implement the Boolean function

Ref. Page 93 Chapter 6: Boolean Algebra and Logic Circuits Slide 71/78

Computer Fundamentals: Pradeep K. Sinha & Priit Sinha

Designing a Combinational Circuit

Example 1 – Half-Adder Design

Inputs		Outputs	
A	B	C	S
0	0	0	0
0	1	0	1
1	0	0	1
1	1	1	0

$S = \bar{A} \cdot B + A \cdot \bar{B}$
 $C = A \cdot B$

} Boolean functions for the two outputs.

Ref. Page 93 Chapter 6: Boolean Algebra and Logic Circuits Slide 72/78

Computer Fundamentals: Pradeep K. Sinha & Priit Sinha

Designing a Combinational Circuit

Example 1 – Half-Adder Design

(Continued from previous slide...)

Logic circuit diagram to implement the Boolean functions

Ref. Page: 94 Chapter 6: Boolean Algebra and Logic Circuits Slide: 73/78

Computer Fundamentals: Pradeep K. Sinha & Priit Sinha

Designing a Combinational Circuit

Example 2 – Full-Adder Design

Inputs			Outputs	
A	B	D	C	S
0	0	0	0	0
0	0	1	0	1
0	1	0	0	1
0	1	1	1	0
1	0	0	0	1
1	0	1	1	0
1	1	0	1	0
1	1	1	1	1

Truth table for a full adder

(Continued on next slide)

Ref. Page: 94 Chapter 6: Boolean Algebra and Logic Circuits Slide: 74/78

Computer Fundamentals: Pradeep K. Sinha & Priit Sinha

Designing a Combinational Circuit

Example 2 – Full-Adder Design

(Continued from previous slide...)

Boolean functions for the two outputs:

$$S = \bar{A} \cdot \bar{B} \cdot D + \bar{A} \cdot B \cdot \bar{D} + A \cdot \bar{B} \cdot \bar{D} + A \cdot B \cdot D$$

$$C = \bar{A} \cdot B \cdot D + A \cdot \bar{B} \cdot D + A \cdot B \cdot \bar{D} + A \cdot B \cdot D$$

$$= A \cdot B + A \cdot D + B \cdot D \quad (\text{when simplified})$$

(Continued on next slide)

Ref. Page: 95 Chapter 6: Boolean Algebra and Logic Circuits Slide: 75/78

Computer Fundamentals: Pradeep K. Sinha & Priit Sinha

Designing a Combinational Circuit

Example 2 – Full-Adder Design

(Continued from previous slide...)

(a) Logic circuit diagram for sums

(Continued on next slide)

Ref. Page: 95 Chapter 6: Boolean Algebra and Logic Circuits Slide 76/78

Computer Fundamentals: Pradeep K. Sinha & Priit Sinha

Designing a Combinational Circuit

Example 2 – Full-Adder Design

(Continued from previous slide...)

(b) Logic circuit diagram for carry

Ref. Page: 95 Chapter 6: Boolean Algebra and Logic Circuits Slide 77/78

Computer Fundamentals: Pradeep K. Sinha & Priit Sinha

Key Words/Phrases

§ Absorption law	§ Equivalence function	§ NOT gate
§ AND gate	§ Exclusive-OR function	§ Operator precedence
§ Associative law	§ Exhaustive enumeration	§ OR gate
§ Boolean algebra	§ method	§ Parallel Binary Adder
§ Boolean expression	§ Half-adder	§ Perfect induction
§ Boolean functions	§ Idempotent law	§ method
§ Boolean identities	§ Involution law	§ Postulates of Boolean
§ Canonical forms for	§ Literal	§ algebra
§ Boolean functions	§ Logic circuits	§ Principle of duality
§ Combination logic	§ Logic gates	§ Product-of-Sums
§ circuits	§ Logical addition	§ expression
§ Cumulative law	§ Logical multiplication	§ Standard forms
§ Complement of a	§ Maxterms	§ Sum-of Products
§ function	§ Minimization of Boolean	§ expression
§ Complementations	§ functions	§ Truth table
§ De Morgan's law	§ Minterms	§ Universal NAND gate
§ Distributive law	§ NAND gate	§ Universal NOR gate
§ Dual identities		

Ref. Page: 97 Chapter 6: Boolean Algebra and Logic Circuits Slide 76/78
